

2017-2018 OMTA FLUTE THEORY LEVEL THREE

Student's Name _____

Teacher's Name _____

Written Score _____
Aural Score _____
TOTAL _____

1. NOTATION OF PITCH

Write the letter name of each note on the line below each note.














Draw the fingering for each of these notes.



Draw a **flat** sign.




Draw a **natural** sign.




2. NOTATION OF RHYTHM

Draw the following notes or rests:




Whole Rest



Quarter Rest



Half Rest



Half Note



Two Eighth Notes


TURN TO THE NEXT PAGE

At the beginning (left) of each example, circle the correct time signature.

2
4

 3
4

 4
4



2
4


 3
4

 4
4



3. KEY SIGNATURES




Identify the following key signatures.





4. HARMONIC STUDY

Identify the following Major arpeggios.

5. SCALES

Circle the correct pattern of whole steps and half steps used in a Major scale.


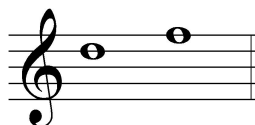

W W H W H W W

H H W H W W H

W W H W W W H

6. INTERVALS


Identify the following intervals as a **second** or a **third**.



7. TERMINOLOGY

Use a word from the word list to complete each sentence.

WORD LIST			
crescendo	natural	accidental	root

- a. An _____ is a sharp, flat or natural not in the key signature.
- b.  Is the symbol for _____ which means to play gradually louder.
- c. A _____ cancels a sharp or a flat.
- d. The _____ is the note of the triad that gives the triad its name.


Match the **terms** with the **definitions**. Write the number on the line.

Terms	Definitions
_____ diminuendo ()	1. two or more notes of different pitch played on one breath with only the first note tongued
_____ ,	2. speed of a musical composition
_____ dynamics	3. the distance between two notes
_____ slur	4. to hold a note or rest
_____ articulation	5. a triad whose notes are presented one at a time
_____ fermata ()	6. breathmark
_____ arpeggio	7. gradually softer
_____ tempo	8. how loud or soft the music is played
_____ interval	9. manner of starting a note (tongued or slurred)

TURN TO NEXT PAGE

8. MUSICAL EXAMPLE

Use the musical example below to answer the questions below. *The measures are numbered.*



a. The example is in the _____ clef. *Circle the answer.*

treble

bass

b. The time signature for this melody tells us there are _____ beats in each measure.

c. The dynamic marking tells us to play the music: *Circle the answer.*

soft

medium soft

medium loud

loud

d. The curved line in measure 1 is a : *Circle the answer.*

slur

tie

e. The interval circled in measure 1 is a: *Circle the answer.*

2nd

3rd

f. The notes in measures 2 & 3 should be played: *Circle the answer..*

legato

staccato

2017-2018 OMTA Aural Awareness Levels 3 &4

Student's Name _____

- | | | |
|-----|------------------|------------------|
| 1. | Same | Different |
| 2. | Staccato | Legato |
| 3. | Staccato | Legato |
| 4. | Piano | Forte |
| 5. | High | Low |
| 6. | Gradually Louder | Gradually Softer |
| 7. | Second | Third |
| 8. | Higher | Lower |
| 9. | Higher | Lower |
| 10. | Higher | Lower |