


KEY SIGNATURES AND SCALES

Identify the key signatures.



9. ____ Major



10. ____ minor

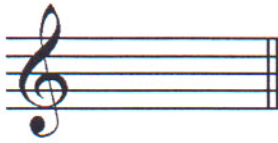


11. ____ minor

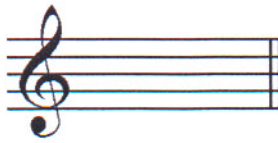


12. ____ Major

Draw the key signatures.



13. A Major



14. a minor




15. g minor



16. Bb Major


Identify the scales. **Include Major, harmonic minor, or natural minor** in the answer.



17. _____



18. _____




19. _____

Draw the scales one octave **ascending**.

Use **whole notes**.

Use **accidentals as needed**.

DO NOT USE A KEY SIGNATURE.



20. A Major



21. g harmonic minor

22. What is the subdominant in the key of D Major? Circle the answer.

D

G

A

HARMONIC STUDY

Draw the **major triad** above each note. Use **whole notes**. Use **accidentals as needed**.



23.

24.

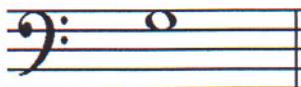


25.

26.



27.




28.

TURN TO THE NEXT PAGE

INTERVALS

Circle the minor 3rd.

29. 

Draw the interval **above** the note. Use whole notes.



30. 6th

31. 5th

32. 7th

33. Major 2nd

TERMINOLOGY

Match the **terms** with the **definitions**. Write the letter on the blank line.

TERMS

- 34. _____ poco a poco
- 35. _____ triplet
- 36. _____ con spirito
- 37. _____ dolce
- 38. _____ giocoso
- 39. _____ adagio

DEFINITIONS

- A. Happy or joyful
- B. Sweetly
- C. Slow, slower than andante
- D. Gradually faster
- E. 3 eighth notes played in the time of 2 eighth notes
- F. With spirit
- G. Little by little

TURN TO THE NEXT PAGE

MUSICAL EXAMPLE

Use the musical example to answer the questions below. **The measures are numbered.**

The musical example consists of four measures of piano music. The first measure is marked 'Marcato' and features a melodic line in the treble clef with a slur over it. The second measure continues the melodic line. The third measure has a dynamic marking 'ff' and a triad circled in red. The fourth measure concludes the phrase. The bass clef part provides harmonic support with chords and single notes.

40. What does the tempo marking mean? Circle the answer.

- Moderately Merrily Marked

41. What is the time signature? Circle the answer.

- $\frac{4}{4}$ $\frac{2}{4}$ $\frac{3}{4}$

42. What is the triad circled in measure three? Circle the answer.

- d minor D Major F Major

43. What does the dynamic marking in measure three mean? Circle the answer.

- Forte Fortissimo Fermata

44. What key is this musical example written in? Circle the answer.

- d minor G Major F Major

2018-2019 OMTA Aural Awareness Levels 5 & 6

Aural Score

Student's Name _____


1. 

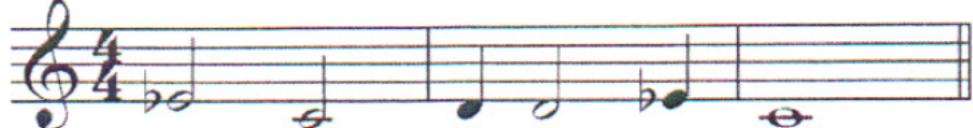
2. 

3. 

- 4. Andante Allegro
- 5. Parallel Contrary
- 6. Fourth Third
- 7. Third Second
- 8. Same Different
- 9. Crescendo Diminuendo
- 10. Accelerando Ritardando

8. Rhythm Example



11. 

12. 