



2021 OMTA THEORY LEVEL SIX—PIANO

Student's Name _____

Written Score	
Aural Score	
TOTAL SCORE	

Teacher's Name _____

Draw an enharmonic note next to each note given using whole notes. Use accidentals as needed.



Draw one note under the arrow to complete the measures in the given time signature.



Draw one rest under the arrow to complete one measure in the given time signature.



Circle the measure that has the incorrect number of beats.



TURN TO THE NEXT PAGE

2021 OMTA THEORY LEVEL SIX—PIANO

Label the key signatures.



_____ Major



_____ minor




_____ minor




_____ Major


Draw the key signatures.



e minor



D Major




F Major



b minor

Circle the interval of a 6th.



What is the dominant in the key of G Major? Circle the correct answer.

D


A

G

TURN TO THE NEXT PAGE

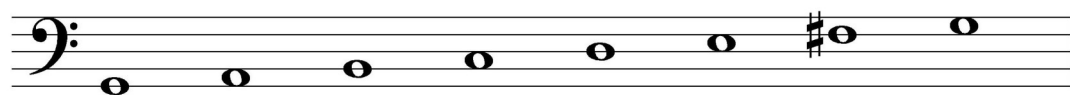
2021 OMTA THEORY LEVEL SIX—PIANO

Write the name of the tonic note of each scale and circle whether the scale is Major, natural minor, harmonic minor, or melodic minor.




Tonic: _____

Major
natural minor
harmonic minor
melodic minor



Tonic: _____


Major
natural minor
harmonic minor
melodic minor




Tonic: _____

Major
natural minor
harmonic minor
melodic minor

Draw the scales one octave ascending (going up), one note above each arrow. Use whole notes and accidentals as needed. Do not use a key signature.



B \flat Major



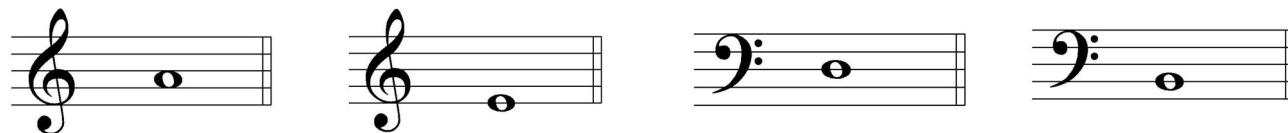
b harmonic
minor



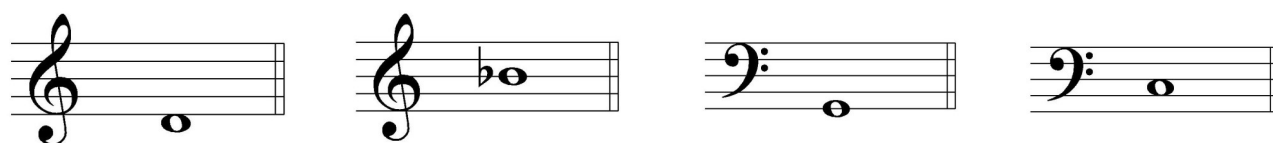
TURN TO THE NEXT PAGE

2021 OMTA THEORY LEVEL SIX—PIANO


Complete the minor triads above the given root using whole notes. Use accidentals as needed.



Complete the Major triads above the given root using whole notes. Use accidentals as needed.



Draw the correct interval above each note using a whole note. Use accidentals as needed.



Match the terms with the definitions. Write the letter of the correct definition on the blank line.

TERMS

_____ dominant triad

_____ tonic triad

_____ *giocoso*

_____ subdominant triad

_____ tonic

DEFINITIONS

A. Major triad built on scale degree four

B. Scale degree one

C. Major triad built on scale degree five

D. Joyful or playful

E. Major triad built on scale degree one

TURN TO THE NEXT PAGE

2021 OMTA THEORY LEVEL SIX—PIANO

Use the music example below to answer the following questions. The measures are numbered. Circle the correct answer or fill in the blank for each question.

Allegretto

The musical score is in D major (two sharps) and 2/4 time. It consists of four measures. Measure 1 begins with a forte (*f*) dynamic. Measure 2 contains a first ending bracket. Measure 3 contains a second ending bracket. Measure 4 ends with a circled marking that reads "D.C. al Fine".

The example is in the key of _____. Include Major or minor in the answer.

What is the time signature of the music example?

$\frac{2}{4}$

$\frac{3}{4}$

$\frac{4}{4}$

What is the definition of the tempo marking?

Very fast

Walking tempo

Slower than allegro and faster than moderato

In measure 4, the melody ends on which scale degree?

Tonic

Subdominant

Dominant

What is the meaning of the symbol circled in measure 4?

Take the coda

Return to the beginning and play to Fine

From the sign

END OF WRITTEN EXAM

