

2021 OMTA THEORY LEVEL SIX—CLARINET

Student's Name _____


Teacher's Name _____

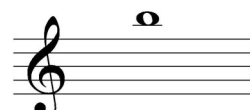
Written Score	
Aural Score	
TOTAL SCORE	

Notation of Pitch


Write the letter name of each note on the line below.



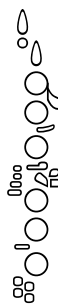

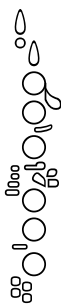




Draw the enharmonic note in the measure. Use whole notes. Use accidentals as needed.



Identify the following notes. Below the staff fill in the fingering on the clarinet diagrams.



Identify the note name from the fingering diagrams.











TURN TO THE NEXT PAGE

2021 OMTA THEORY LEVEL SIX—CLARINET

Notation of Rhythm

Each measure below is incomplete. Circle the correct rhythm that completes the measure.

$\frac{3}{4}$ 	
$\frac{2}{4}$ 	
$\frac{4}{4}$ 	

Key Signatures

Identify the following Major key signatures. **Use Major in the answer.**




_____ Major




_____ Major

Draw the key signatures.



B \flat Major




b minor

2021 OMTA THEORY LEVEL SIX—CLARINET


Scales

Identify the scales. Include **Major**, **natural minor**, or **harmonic minor** in the answer.






Draw the following scales one octave ascending. **Use whole notes.** Use accidentals as needed. Do not use a key signature.



D Major




g natural minor

TURN TO THE NEXT PAGE


2021 OMTA THEORY LEVEL SIX—CLARINET

Harmonic Study

Draw the arpeggios in root position.





G Major



e minor


Identify the Major arpeggios. Use **Major** or **minor** in the answer.





Intervals

Identify the interval. Circle the answer.



5th


6th




4th

minor 3rd

Draw the interval **above** the note. Use **whole notes**. Use accidentals as needed.



7th



Major 3rd

TURN TO THE NEXT PAGE

2021 OMTA THEORY LEVEL SIX—CLARINET**Terminology**

Match the **terms** with the **definitions**. Write the letter on the blank line.

TERMS

_____ dolce
_____ adagio
_____ con spirito
_____ tonic
_____ giocoso
_____ marcato
_____ poco a poco
_____ enharmonic
_____ dominant
_____ a tempo

DEFINITIONS

- A. Marked
- B. First degree of the scale
- C. Notes spelled differently but sound the same
- D. Little by little
- E. Fifth degree of the scale
- F. With spirit
- G. Sweetly
- H. Return to the original tempo after a ritardando or an accelerando
- I. Happy or joyful
- J. Slow, slower than andante

2021 OMTA THEORY LEVEL SIX—CLARINET

Use the music example to answer the questions below. **The measures are numbered.**

Allegro

The example is in the key of _____? Circle the answer.

B \flat Major

b minor

D Major

What does the time signature mean? Circle the answer.

Common time $\frac{4}{4}$

Cut time

$\frac{2}{4}$

What marking is on the first note in measure one? Circle the answer.

Staccato

Accent

Legato

What does the dynamic marking mean in measure one? Circle the answer.

Forte

Piano

Mezzo Forte

What is the articulation in measure three? Circle the answer.

Staccato

Accent

Legato

The example ends on what scale degree? Circle the answer.

Dominant

Tonic

Subdominant

END OF WRITTEN EXAM

