



Student's Name \_\_\_\_\_

Teacher's Name \_\_\_\_\_

Written Score	
Aural Score	
<b>TOTAL SCORE</b>	

Draw the enharmonic note **NEXT** to the note given. Use whole notes. Use accidentals as needed.



Each measure is incomplete. Circle the correct note, rest, or rhythm that completes each measure.

MEASURE	RHYTHMS
$\frac{4}{4}$	
$\frac{3}{4}$	
$\frac{2}{4}$	

Circle the measure that has the incorrect number of beats.



Label the key signatures.



\_\_\_\_ Major



\_\_\_\_ minor




\_\_\_\_ minor



\_\_\_\_ Major


Draw the key signatures.




A Major



a minor





g minor




Bb Major

Using the given note as the root, complete the **Major** triad.

Use whole notes. Use accidentals as needed.



Label the scales. Include **Major**, **harmonic minor**, or **natural minor** in the answer.



\_\_\_\_\_

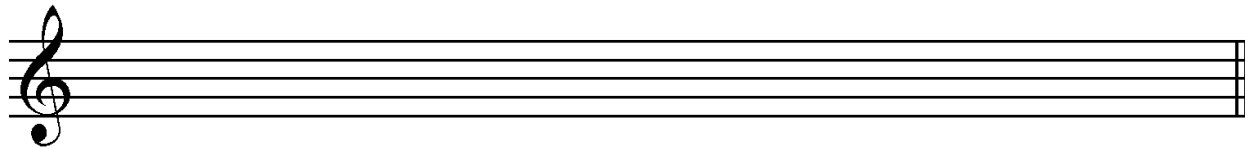


\_\_\_\_\_




\_\_\_\_\_

Draw the scales one octave **ascending** (going up). Use whole notes. Use accidentals as needed. **DO NOT USE A KEY SIGNATURE.**



A Major



g harmonic minor

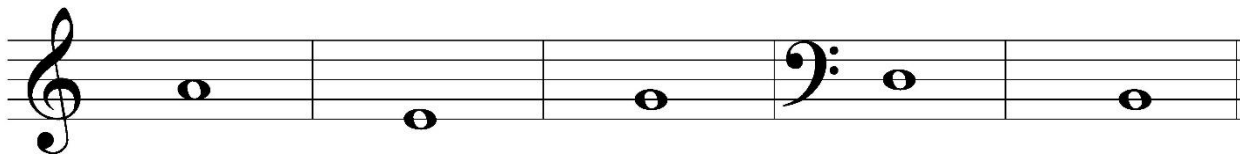
What is the subdominant note in the key of D Major? Circle the answer.

D


G

A

Complete the **minor** triad above each note. Use whole notes. Use accidentals as needed.



Circle the minor 3<sup>rd</sup>.



Draw the interval **above** each note. Use whole notes.



6<sup>th</sup>

5<sup>th</sup>

7<sup>th</sup>

Major 2<sup>nd</sup>

Match the **terms** with the **definitions**. Write the letter on the blank line.

**TERMS**

\_\_\_\_\_ poco a poco

\_\_\_\_\_ eighth note triplet

\_\_\_\_\_ con spirito

\_\_\_\_\_ dolce

\_\_\_\_\_ giocoso

\_\_\_\_\_ adagio

**DEFINITIONS**

A. Happy or joyful

B. Sweetly

C. Slow, slower than andante


D. Gradually faster

E. Three eighth notes in the same time  
as one quarter note

F. With spirit

G. Little by little

Use the music example below to answer the following questions. The measures are numbered.



What is the definition of the tempo marking? Circle the answer.

- Moderately      Merrily      Marked

What is the time signature? Circle the answer.

- $\frac{4}{4}$        $\frac{2}{4}$        $\frac{3}{4}$

What is the triad circled in measure 3? Circle the answer.

- d minor      D Major      F Major

What is the name of the dynamic marking in measure 3? Circle the answer.

- Forte      Fortissimo      Fermata

What is the key of the music example? Circle the answer.

- d minor      G Major      F Major

Aural Score

Student's Name \_\_\_\_\_


1.



2.



3.



4. Andante

Allegro

5. Parallel

Contrary

6. Fourth

Third

7. Third

Second

8. Same

Different

9. Crescendo

Diminuendo

10. Accelerando

Ritardando

8. Rhythm Example



11.



12.

