

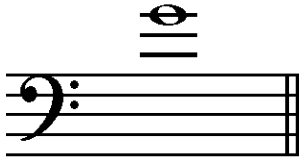
2019-2020 OMTA THEORY LEVEL NINE

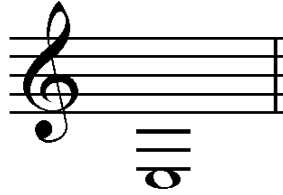
Student's Name _____

Teacher's Name _____



Written Score	
Aural Score	
TOTAL SCORE	

Write the letter name of each note given on the line below. **Use accidentals as needed.**





For each pitch given, draw the enharmonic whole note **next** to the note provided. **Use accidentals as needed.**



Draw the correct answer **in the box**.

16th note


32nd rest

Each measure is incomplete. Circle the correct note or rest that completes each measure.

MEASURE	RHYTHMS
$\frac{4}{4}$	
$\frac{9}{8}$	

In the key of B Major, label the triads as **Tonic**, **Subdominant**, or **Dominant**.







Draw the triad. Use whole notes. Use accidentals as needed.



g minor root position




E-flat Major root position



d minor 1st inversion

Label the scales. Include **Major**, **natural minor**, **harmonic minor**, or **melodic minor** in the answer.









Draw the TONIC (I) and the DOMINANT (V) triads in root position. Use whole notes and accidentals as needed.

EXAMPLE: C Major



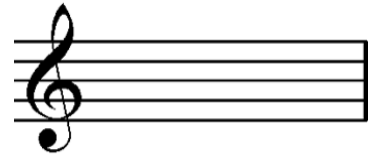
I V

f harmonic minor




i V

A-flat Major




I V


Draw the interval **above** the note. Use whole notes and accidentals as needed.



Major 6th



minor 7th



Perfect 4th

Match the **terms** with the **definitions**. Write the letter on the blank line.

TERMS

- _____ pesante
- _____ tenuto (ten.)
- _____ chromatic scale
- _____ sostenuto (sost.)
- _____ affettuoso
- _____ martellato
- _____ simile
- _____ opus (op.)
- _____ rubato

DEFINITIONS

- A. Tender, warm
- B. The same
- C. Hammered
- D. A scale composed entirely of half steps
- E. Expressive variation of tempo
- F. Heavy, weighty
- G. Sustained
- H. Held
- I. Work

TURN TO THE NEXT PAGE

Use the music example below to answer the following questions. The measures are numbered.

Andante cantabile.

The example is in the key of _____. Include Major or minor in the answer.

What is the definition of Andante cantabile? Circle the answer.

- Happy or joyful In a quiet style Walking tempo in a singing style

What is the time signature? Circle the answer.

- $\frac{9}{8}$ $\frac{3}{4}$ $\frac{4}{4}$

The notes in measure 4 are an example of a(n) _____. Circle the answer.

- Ostinato Chromatic scale Sequence

The circled notes in measure 1 form what type of triad? Circle the answer.

- Tonic Subdominant Dominant

Are the circled notes in measure 8 an eighth-note triplet? Circle the answer.

- Yes No


END OF WRITTEN TEST

Aural Score

Student's Name _____

1. 



2. 

3. 3 4 6
 4 4 8

4. Major 2nd minor 3rd Perfect 4th

5. minor 6th Perfect 5th Major 7th

6. Major 3rd Major 6th Augmented 4th

7. Major minor

8. Major melodic minor harmonic minor natural (pure) minor chromatic

9. Major melodic minor harmonic minor natural (pure) minor chromatic

10. Major melodic minor harmonic minor natural (pure) minor chromatic

11. 

12. Maestoso Tranquillo Agitato