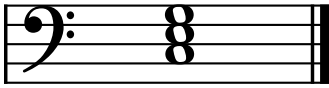
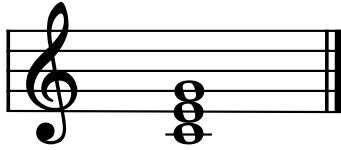


# Theory Level 3 – Triad Identification

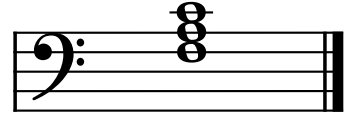
Name the Major triads.



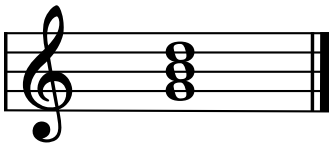
\_\_\_\_\_ Major



\_\_\_\_\_ Major




\_\_\_\_\_ Major



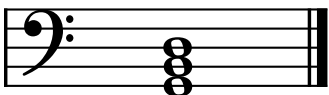
\_\_\_\_\_ Major



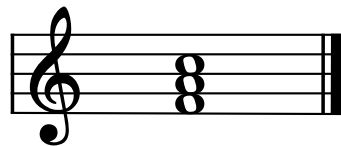
\_\_\_\_\_ Major



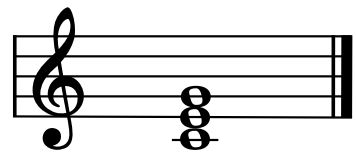
\_\_\_\_\_ Major



\_\_\_\_\_ Major



\_\_\_\_\_ Major



\_\_\_\_\_ Major