

# Theory Level 8 – Key Signature Identification

Write the name of the Major or minor key shown by each key signature.



\_\_\_\_\_ Major



\_\_\_\_\_ minor



\_\_\_\_\_ minor



\_\_\_\_\_ Major



\_\_\_\_\_ minor



\_\_\_\_\_ minor



\_\_\_\_\_ Major




\_\_\_\_\_ Major




\_\_\_\_\_ Major



\_\_\_\_\_ Major



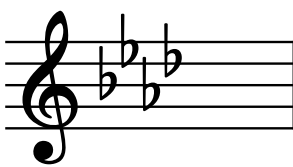
\_\_\_\_\_ minor



\_\_\_\_\_ minor



\_\_\_\_\_ minor



\_\_\_\_\_ Major



\_\_\_\_\_ minor



\_\_\_\_\_ Major