


Theory Level 8 – Triad Identification

On the blank line, write the root of the triads and circle whether the triads are Major or minor.




Major

_____ minor




Major

_____ minor




Major

_____ minor




Major

_____ minor



Major

_____ minor



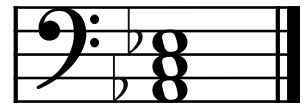
Major

_____ minor




Major

_____ minor




Major

_____ minor




Major

_____ minor




Major

_____ minor




Major

_____ minor



Major

_____ minor



Major

_____ minor



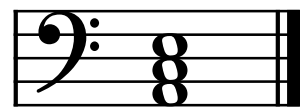
Major

_____ minor



Major

_____ minor



Major

_____ minor