



Theory Level 10 – Triad Identification

On the blank lines, write the root of each triad and circle whether each triad is Major or minor.




Major

minor




Major

minor



Major

minor



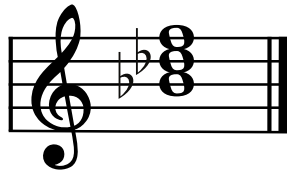
Major

minor




Major

minor




Major

minor




Major

minor



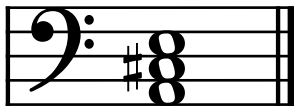
Major

minor




Major

minor




Major

minor




Major

minor



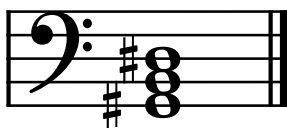
Major

minor




Major

minor




Major

minor



Major

minor



Major

minor