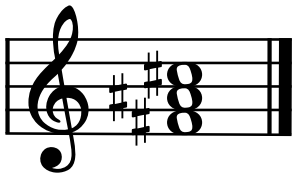


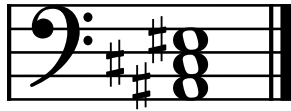
Theory Level 11 – Triad Identification

On the blank lines, write the root of each triad and circle whether the triad is Major or minor.



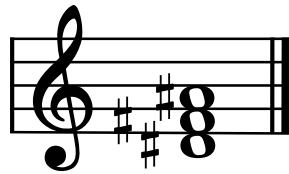
Major

_____ minor




Major

_____ minor



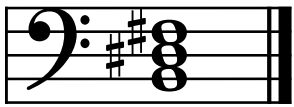
Major

_____ minor




Major

_____ minor




Major

_____ minor




Major

_____ minor




Major

_____ minor




Major

_____ minor



Major

_____ minor



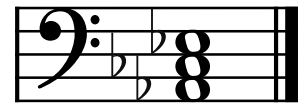
Major

_____ minor




Major

_____ minor




Major

_____ minor




Major

_____ minor




Major

_____ minor



Major

_____ minor



Major

_____ minor